



Groups

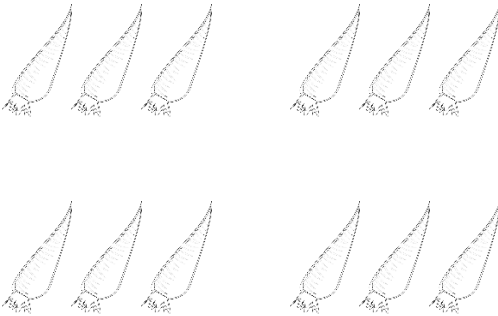
1. Write how many groups of 2 are in 8. _____




2. Write how many groups of 5 are in 10. _____



3. Write how many groups of 3 are in 12. _____




4. Write how many groups of 5 are in 20. _____





5. Write how many groups of 3 are in 18. _____



6. Write how many groups of 4 are in 16. _____



7. Write how many groups of 2 are in 18. _____

